



# UNICUS OLYMPIADS

## Sample Paper

**Class 1**


**Unicus Mathematics Olympiad**



Section	Total Questions	Marks per Questions	Total Marks
Classic Section	20	1	20
Scholar Section	5	2	10
<b>Grand Total</b>	<b>25</b>		<b>30</b>

**Classic Section (Each Question is 1 Mark)**

1. Count the number of oranges:



a. 4

b. 6

c. 7

---

2. What comes before '6'?



3. What is the colour of the car?



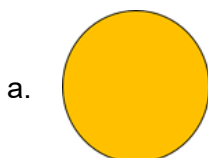
a. Red

b. Green

c. Yellow

---

4. What is the shape of the given image?

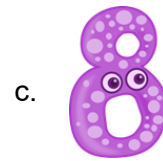



Unicus Mathematics Olympiad (UMO)


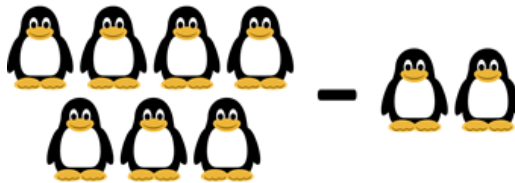
5. Count the ants:



6. What comes after 7?



7. Find the difference:



8. Find its number name:



a. Five

b. Three

c. Four

---

9. Which basket is empty?



a. Left

b. Right

c. Centre

---

## Unicus Mathematics Olympiad (UMO)

10. Select the correct symbol to show the greater number:



11. Which animal is the lightest?



12. What is the time shown in the clock given below?




a. 12:00

b. 3:00


c. 5:00

Unicus Mathematics Olympiad (UMO)

13. Identify the shape of the given image:



Circle



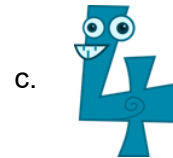
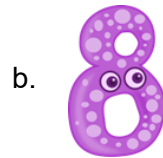
Oval





Rectangle

---

14. Which number is greater than '7'?



15. Fill in the blank:



16. Count the number of triangles in the given image:



a. 3

b. 2

c. 1

---

Unicus Mathematics Olympiad (UMO)

17. Count the number of apples:



a. 4

b. 6

c. 3

---

18. Find its number name:



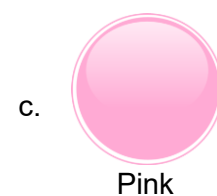
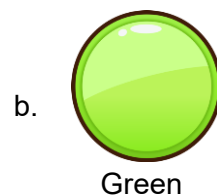

a. Two

b. Eight



c. Ten

---

19. What is the colour of grapes?



20. What is the time shown in the clock given below?



**Scholar Section (Each Question is 2 Marks)**

21. Which fruit is the heaviest?



Watermelon



Apple



Orange

22. Which sign should come between the given two numbers?



23. How many balls are shown below?



a. 2

b. 4

c. 6

24. Complete the given series:




a. 1, 3, 5

b. 1, 2, 3

c. 4, 5, 6

Unicus Mathematics Olympiad (UMO)

25. Fill in the blank:



a. 8

b. 4

c. 7

**Answer Key**

1.	b	2.	c	3.	a	4.	c	5.	b	6.	c	7.	a
8.	a	9.	b	10.	a	11.	c	12.	b	13.	a	14.	b
15.	c	16.	a	17.	a	18.	c	19.	b	20.	b	21.	a
22.	c	23.	b	24.	c	25.	c						